

MATBEG

MATEMATİKSEL MUHAKEME SERİSİ

TAHMIN BECERİSİ



3 VE 4. SINIF

İşlemsel Tahmin

Problem 1

Aşağıdaki eşitliklerden hangisi ya da hangileri doğrudur? İşaretleyiniz.

$$24 \times 5 = 25 \times 4$$

$$20 \times 15 = 60 \times 5$$

$$10 \times 7 = 14 \times 5$$

$$12 \times 13 = 13 \times 12$$

$$3 \times 18 = 6 \times 9$$

$$15 \times 3 = 8 \times 5$$

$$84 \times 22 = 86 \times 20$$

$$75 \times 10 = 25 \times 30$$

$$36 \times 3 = 27 \times 4$$

$$16 \times 18 = 14 \times 20$$

$$42 \times 28 = 40 \times 30$$

$$17 \times 19 = 16 \times 20$$

Problem 2

Aşağıdaki eşitliklerin doğru olabilmesi için kutucuklara uygun sayıları yazınız.

Örnek

$$50 \times 28 = 100 \times 14$$

$$\square \times \square = 50 \times 48$$

$$\square \times \square = 60 \times 24$$

$$\square \times \square = 96 \times 20$$

$$\square \times \square \times \square = 80 \times 25$$

$$\square \times \square \times \square = 50 \times 36$$



Yazdığınız sayılar eşitliklerdeki sayılardan farklı olmalıdır.

Problem 4

Verilen rakamlardan yalnızca 2 adet kullanarak sayı doğrusunda işaretlenen sayıyı gösteriniz.

Örnek

A number line from 0 to 600 with a tick mark at 300. Above the line are five purple boxes containing the digits 0, 2, 3, 5, and 6. Below the line, at the 300 mark, are three white boxes containing the digits 3, 5, and 0. Dashed lines connect the digit 3 to the hundreds place, 5 to the tens place, and 0 to the units place of the number 350 on the number line.

a

A number line from 0 to 800 with a tick mark at 400. Above the line are five purple boxes containing the digits 0, 1, 4, 7, and 9. Below the line, at the 400 mark, are three white boxes containing the digits 4, 0, and 0.

b

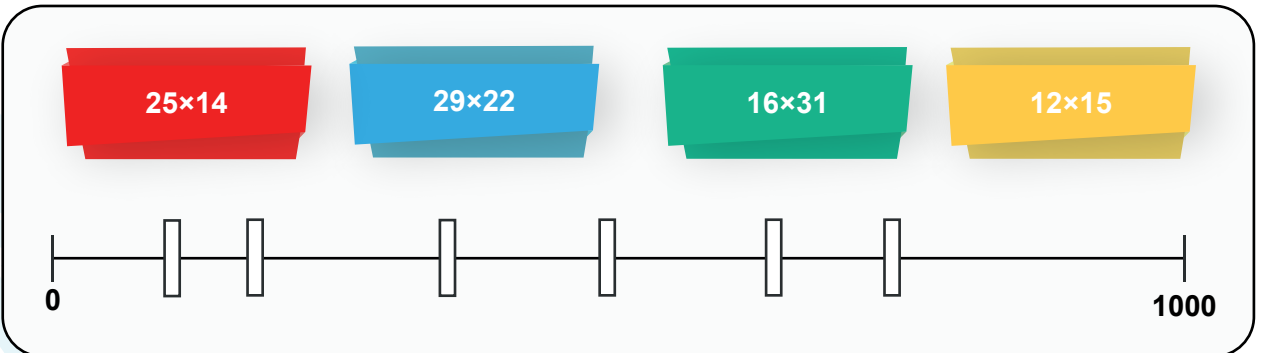
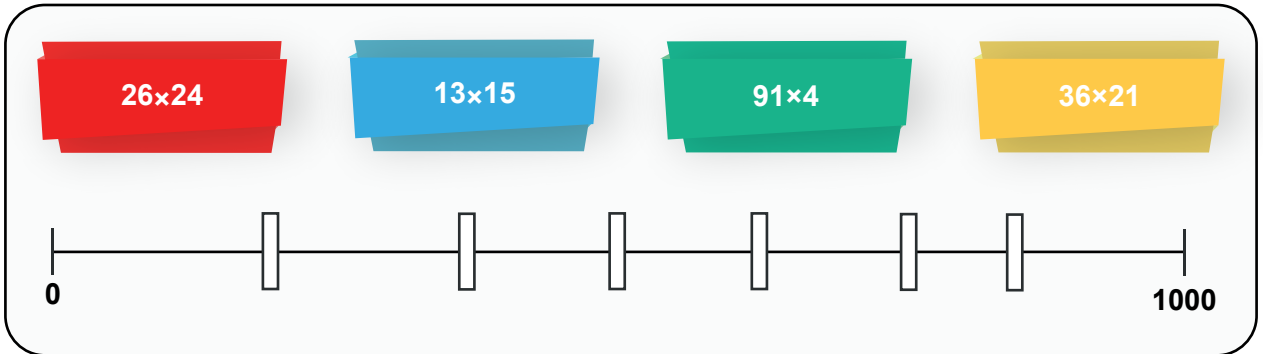
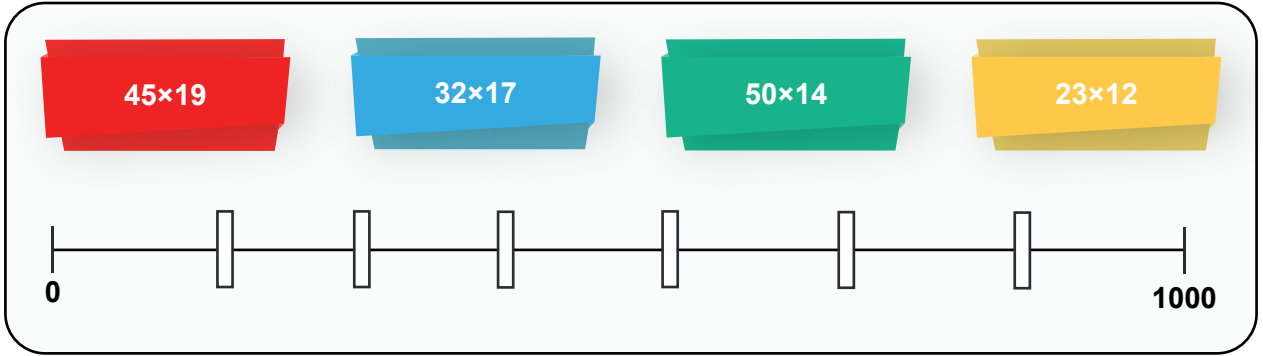
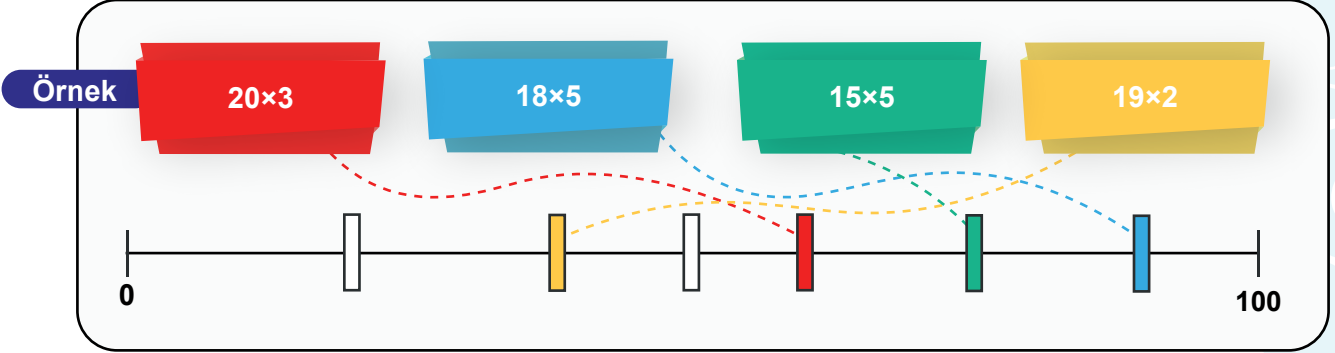
A number line from 0 to 1000 with a tick mark at 250. Above the line are five purple boxes containing the digits 2, 4, 5, 8, and 9. Below the line, at the 250 mark, are three white boxes containing the digits 2, 5, and 0.

c

A number line from 0 to 1000 with a tick mark at 360. Above the line are five purple boxes containing the digits 0, 1, 3, 6, and 8. Below the line, at the 360 mark, are three white boxes containing the digits 3, 6, and 0.


Problem 13


Aşağıdaki işlemlerin sonuçlarını sayı doğrusu üzerinde boyayarak gösteriniz.




! Yalnızca 4 adet kutucuğu boyayınız.

Problem 25


Yaklaşık nokta sayısı kaçtır? İşaretleyiniz.

a




10
15
20

b




20
30
40

c




10
15
20

d



30
40
50

e



60
70
80



www.matbeg.com



© /matbegtr